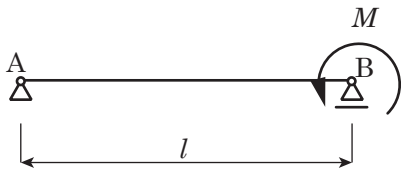
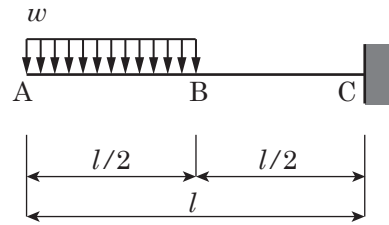


[1] 単純ばりの曲げモーメント図を描け.



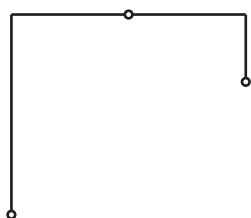
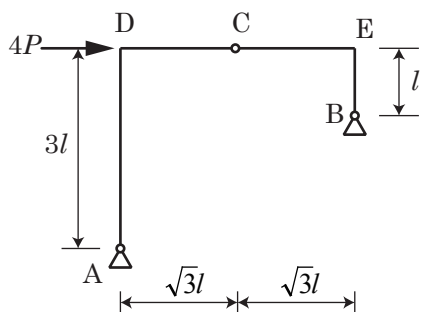
M 図

[2] 片持ちばりの曲げモーメント図を描け.



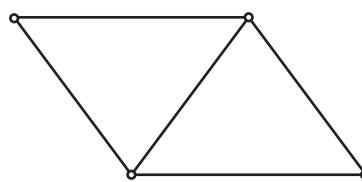
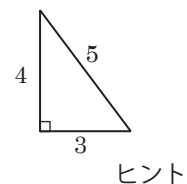
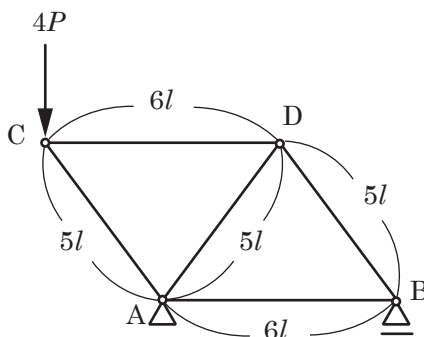
M 図

[3] 3 ヒンジラーメンの曲げモーメント図を描け。



M 図

[4] トラスの軸方向力を求めよ。



N 図